

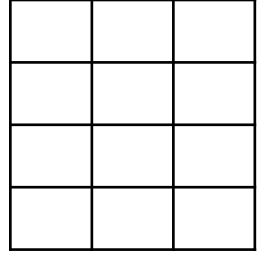
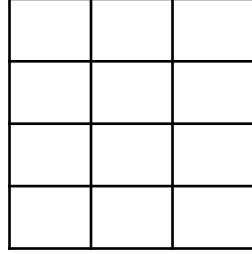
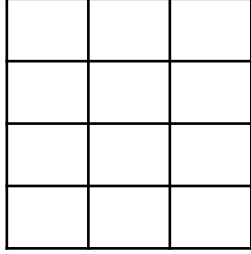
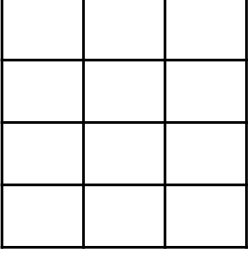
ADI:  
SOYADI:  
SINIFI:  
NO:

## 4.SINIF ETKİNLİKLERİ

### BİLEŞİK KESİRLER-2

[www.etkinlikkaravani.com](http://www.etkinlikkaravani.com)

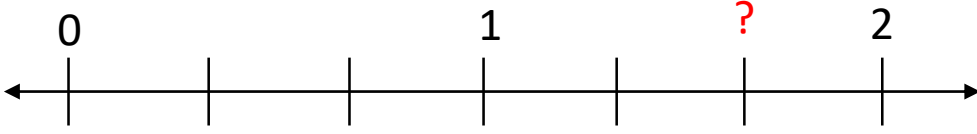
Aşağıdaki verilen şekilleri kesirlere uygun boyayınız.



$$\frac{15}{24}$$

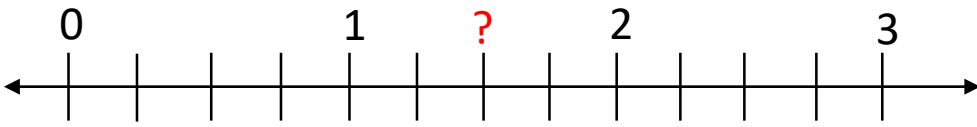
$$\frac{19}{12}$$

Sayı doğrusunda ? İşareti ile gösterilen yere karşılık gelen kesri ve okunuşunu yazalım.



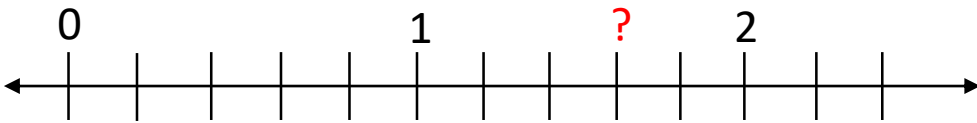
?:

okunuşu:



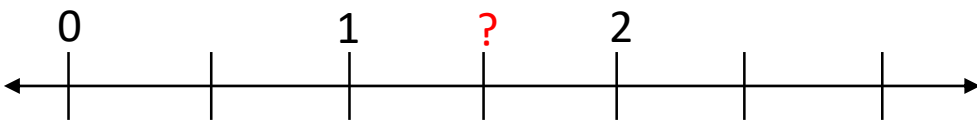
?:

okunuşu:



?:

okunuşu:



?:

okunuşu: