

ADI:

SOYADI:

SINIFI:

NO:

3.SINIF ETKİNLİKLERİ


GEOMETRİK CİSİMLER

Değerlendirme-2

www.etkinlikkaravani.com

Aşağıya bir kenarı 3 cm olan bir üçgen çiziniz.

Aşağıya bir kenarı 4 cm olan bir kare çiziniz.



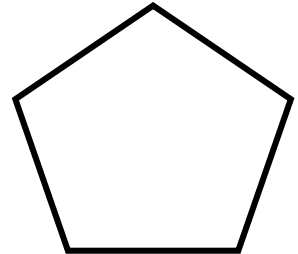

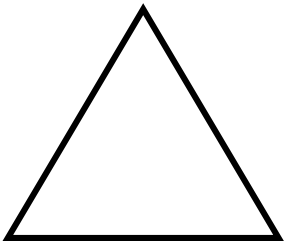
Aşağıdaki şekillerin isimlerini altına yazıp köşegenlerini çiziniz.



.....

.....

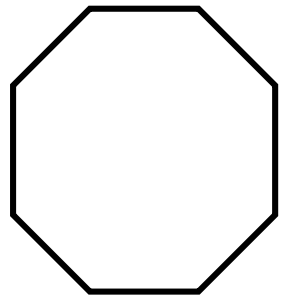
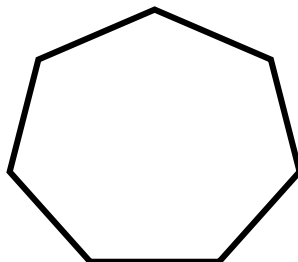
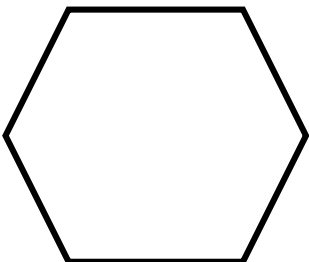
Aşağıdaki şekillerin isimlerini altına yazıp köşelerini işaretleyiniz.



.....

.....

.....



.....

.....

.....