

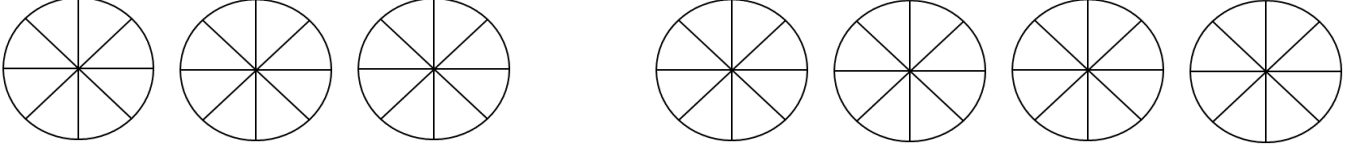
ADI:
SOYADI:
SINIFI:
NO:

4.SINIF ETKİNLİKLERİ

TAM SAYILI KESİRLER-2

www.etkinlikkaravani.com

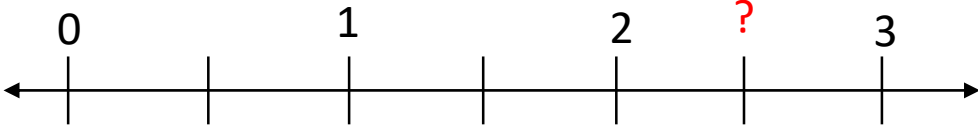
Aşağıdaki verilen şekilleri kesirlere uygun boyayınız.



$$2 \frac{5}{8}$$

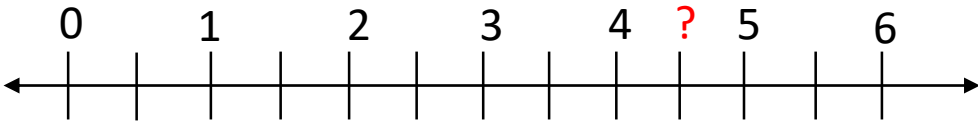
$$3 \frac{4}{8}$$

Sayı doğrusunda ? İşareti ile gösterilen yere karşılık gelen kesri ve okunuşunu yazalım.



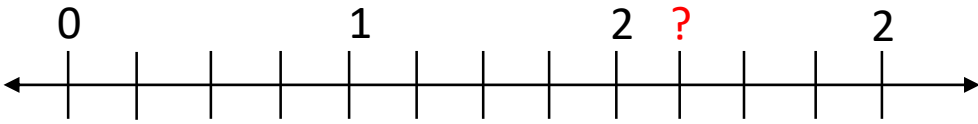
?:

okunuşu:



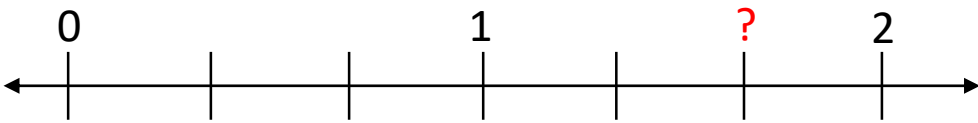
?:

okunuşu:



?:

okunuşu:



?:

okunuşu: