

ADI:

SOYADI:

SINIFI:


NO:


2.SINIF ETKİNLİKLERİ


Eldeli Toplama


www.etkinlikkaravani.com


Aşağıdaki toplama işlemlerini yapalım.



$$\begin{array}{r} \square \\ 25 \\ + 36 \\ \hline \end{array}$$



$$\begin{array}{r} \square \\ 45 \\ + 31 \\ \hline \end{array}$$



$$\begin{array}{r} \square \\ 67 \\ + 28 \\ \hline \end{array}$$



$$\begin{array}{r} \square \\ 36 \\ + 51 \\ \hline \end{array}$$



$$\begin{array}{r} \square \\ 65 \\ + 26 \\ \hline \end{array}$$



$$\begin{array}{r} \square \\ 78 \\ + 17 \\ \hline \end{array}$$



$$\begin{array}{r} \square \\ 46 \\ + 37 \\ \hline \end{array}$$



$$\begin{array}{r} \square \\ 65 \\ + 27 \\ \hline \end{array}$$



$$\begin{array}{r} \square \\ 45 \\ + 49 \\ \hline \end{array}$$



$$\begin{array}{r} \square \\ 79 \\ + 13 \\ \hline \end{array}$$



$$\begin{array}{r} \square \\ 36 \\ + 54 \\ \hline \end{array}$$



$$\begin{array}{r} \square \\ 15 \\ + 45 \\ \hline \end{array}$$



$$\begin{array}{r} \square \\ 32 \\ + 58 \\ \hline \end{array}$$



$$\begin{array}{r} \square \\ 47 \\ + 48 \\ \hline \end{array}$$



$$\begin{array}{r} \square \\ 37 \\ + 44 \\ \hline \end{array}$$



$$\begin{array}{r} \square \\ 56 \\ + 38 \\ \hline \end{array}$$



$$\begin{array}{r} \square \\ 74 \\ + 18 \\ \hline \end{array}$$



$$\begin{array}{r} \square \\ 65 \\ + 27 \\ \hline \end{array}$$



$$\begin{array}{r} \square \\ 53 \\ + 38 \\ \hline \end{array}$$



$$\begin{array}{r} \square \\ 37 \\ + 38 \\ \hline \end{array}$$


$$\begin{array}{r} \square \\ 24 \\ + 78 \\ \hline \end{array}$$


$$\begin{array}{r} \square \\ 28 \\ + 19 \\ \hline \end{array}$$


$$\begin{array}{r} \square \\ 35 \\ + 68 \\ \hline \end{array}$$


$$\begin{array}{r} \square \\ 56 \\ + 46 \\ \hline \end{array}$$


$$\begin{array}{r} \square \\ 74 \\ + 9 \\ \hline \end{array}$$