

ADI:

SOYADI:

SINIFI:


NO:


### 3.SINIF ETKİNLİKLERİ


10 ile Kısa Yoldan


Bölme


[www.etkinlikkaravani.com](http://www.etkinlikkaravani.com)



$$\begin{array}{r} 60 \quad | \quad 10 \\ \hline \end{array}$$



$$\begin{array}{r} 80 \quad | \quad 10 \\ \hline \end{array}$$



$$\begin{array}{r} 70 \quad | \quad 10 \\ \hline \end{array}$$



$$\begin{array}{r} 50 \quad | \quad 10 \\ \hline \end{array}$$



$$\begin{array}{r} 40 \quad | \quad 10 \\ \hline \end{array}$$



$$\begin{array}{r} 70 \quad | \quad 10 \\ \hline \end{array}$$



$$\begin{array}{r} 20 \quad | \quad 10 \\ \hline \end{array}$$


$$\begin{array}{r} 30 \quad | \quad 10 \\ \hline \end{array}$$


$$\begin{array}{r} 90 \quad | \quad 10 \\ \hline \end{array}$$


$$\begin{array}{r} 10 \quad | \quad 10 \\ \hline \end{array}$$


$$\begin{array}{r} 50 \quad | \quad 10 \\ \hline \end{array}$$


$$\begin{array}{r} 70 \quad | \quad 10 \\ \hline \end{array}$$

Aşağıdaki bölme işlemlerinin sonuçlarını karşlarına yazınız.

$60 \div 10 =$	$40 \div 10 =$	$50 \div 10 =$
$50 \div 10 =$	$70 \div 10 =$	$70 \div 10 =$
$90 \div 10 =$	$90 \div 10 =$	$60 \div 10 =$
$30 \div 10 =$	$80 \div 10 =$	$90 \div 10 =$
$20 \div 10 =$	$30 \div 10 =$	$20 \div 10 =$
$10 \div 10 =$	$20 \div 10 =$	$40 \div 10 =$