

ADI:

SOYADI:

SINIFI:

NO:

2.SINIF ETKİNLİKLERİ

Bölme İşlemi

Öğreniyorum-1

www.etkinlikkaravani.com

Aşağıda verilen çıkarma işlemlerinin, bölü çizgisi üzerindeki karşılıklarını yazalım.

$12-2=10$


$10-2=8$

$8-2=6$

$6-2=4$

$4-2=2$


$2-2=0$



$9-3=6$

$6-3=3$

$3-3=0$




$16-4=12$

$12-4=8$

$8-4=4$

$4-4=0$




$20-5=15$

$15-5=10$

$10-5=5$

$5-5=0$



$18-3=15$


$15-3=12$

$12-3=9$

$9-3=6$

$6-3=3$

$3-3=0$



$10-2=8$

$8-2=6$

$6-2=4$

$4-2=2$

$2-2=0$

