

ADI:

SOYADI:

SINIFI:

NO:

### 3.SINIF ETKİNLİKLERİ

## KESİRLER

[www.etkinlikkaravani.com](http://www.etkinlikkaravani.com)

Aşağıdaki meyveleri bütün, yarım, çeyrek şeklinde sınıflandırınız.  
Şekillerin altlarına yazınız.



-----



-----



-----



-----

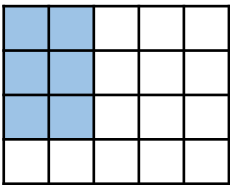


-----

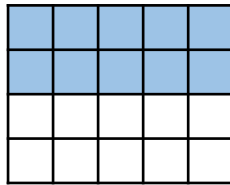


-----

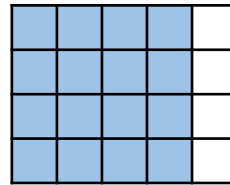
Aşağıdaki şekillerin belirttiği kesri ve okunuşlarını altlarına yazalım.



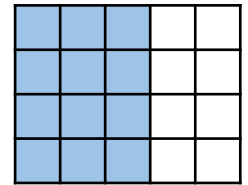
$\frac{6}{20}$  = yirmide altı



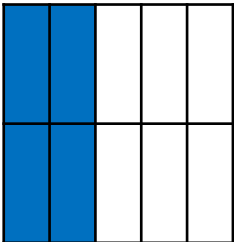
— =



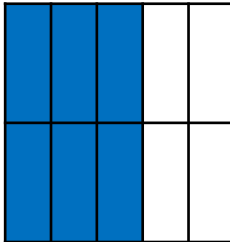
— =



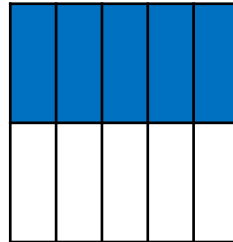
— =



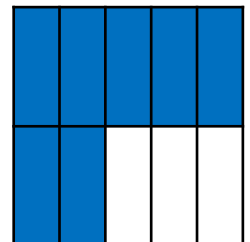
— =



— =



— =



— =