

ADI:

SOYADI:

SINIFI:

NO:

2.SINIF ETKİNLİKLERİ


Bölme İşlemi

Öğreniyorum-3


www.etkinlikkaravani.com

Aşağıda verilen çıkarma işlemlerinin, bölü çizgisi üzerindeki karşılıklarını yazalım.

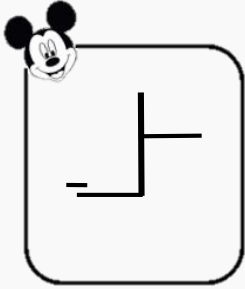
$$10-5=5$$
$$5-5=0$$




$$15-3=12$$
$$12-3=9$$
$$9-3=6$$
$$6-3=3$$
$$3-3=0$$




$$8-2=6$$
$$6-2$$



$$20-5=15$$
$$15-5=10$$
$$10-5=5$$
$$5-5=0$$



$$18-3=15$$
$$15-3=12$$
$$12-3=9$$
$$9-3=6$$
$$6-3=3$$
$$3-3=0$$



$$10-2=8$$
$$8-2=6$$
$$6-2=4$$
$$4-2=2$$
$$2-2=0$$

