

ADI:

SOYADI:


SINIFI:


NO:


### 3.SINIF ETKİNLİKLERİ


## Verilmeyenli Bölme İşlemi Etkinlikleri


[www.etkinlikkaravani.com](http://www.etkinlikkaravani.com)



$$\begin{array}{r} \dots | 7 \\ - \quad | 9 \\ \hline 0 \end{array}$$



$$\begin{array}{r} \dots | 3 \\ - \quad | 7 \\ \hline 0 \end{array}$$



$$\begin{array}{r} \dots | 4 \\ - \quad | 5 \\ \hline 2 \end{array}$$



$$\begin{array}{r} \dots | 9 \\ - \quad | 5 \\ \hline 3 \end{array}$$



$$\begin{array}{r} \dots | 7 \\ - \quad | 4 \\ \hline 1 \end{array}$$



$$\begin{array}{r} \dots | 6 \\ - \quad | 6 \\ \hline 0 \end{array}$$



$$\begin{array}{r} \dots | 4 \\ - \quad | 8 \\ \hline 3 \end{array}$$



$$\begin{array}{r} \dots | 5 \\ - \quad | 8 \\ \hline 3 \end{array}$$



$$\begin{array}{r} \dots | 8 \\ - \quad | 5 \\ \hline 4 \end{array}$$



$$\begin{array}{r} \dots | 7 \\ - \quad | 6 \\ \hline 2 \end{array}$$



$$\begin{array}{r} \dots | 3 \\ - \quad | 4 \\ \hline 1 \end{array}$$



$$\begin{array}{r} \dots | 6 \\ - \quad | 8 \\ \hline 5 \end{array}$$



$$\begin{array}{r} \dots | 3 \\ - \quad | 8 \\ \hline 2 \end{array}$$



$$\begin{array}{r} \dots | 4 \\ - \quad | 6 \\ \hline 0 \end{array}$$



$$\begin{array}{r} \dots | 9 \\ - \quad | 2 \\ \hline 2 \end{array}$$



$$\begin{array}{r} \dots | 8 \\ - \quad | 3 \\ \hline 7 \end{array}$$



$$\begin{array}{r} \dots | 9 \\ - \quad | 4 \\ \hline 2 \end{array}$$



$$\begin{array}{r} \dots | 7 \\ - \quad | 5 \\ \hline 0 \end{array}$$



$$\begin{array}{r} \dots | 9 \\ - \quad | 2 \\ \hline 8 \end{array}$$


$$\begin{array}{r} \dots | 9 \\ - \quad | 9 \\ \hline 1 \end{array}$$


$$\begin{array}{r} \dots | 7 \\ - \quad | 7 \\ \hline 1 \end{array}$$


$$\begin{array}{r} \dots | 5 \\ - \quad | 6 \\ \hline 0 \end{array}$$


$$\begin{array}{r} \dots | 8 \\ - \quad | 4 \\ \hline 6 \end{array}$$


$$\begin{array}{r} \dots | 3 \\ - \quad | 9 \\ \hline 1 \end{array}$$