

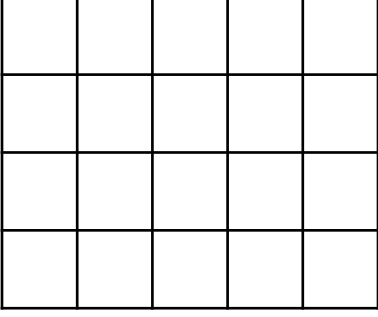
ADI:
SOYADI:
SINIFI:
NO:

4.SINIF ETKİNLİKLERİ

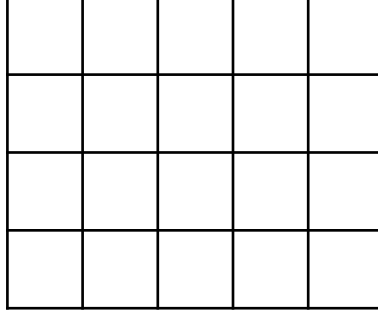
BASİT KESİRLER-2

www.etkinlikkaravani.com

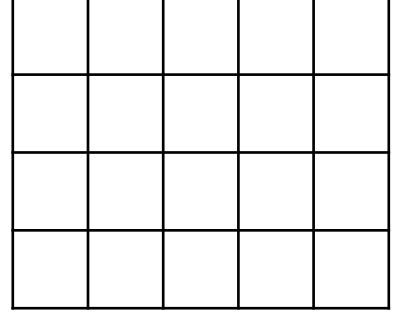
Aşağıdaki verilen şekilleri kesirlere uygun boyayınız.



$$\frac{12}{20}$$

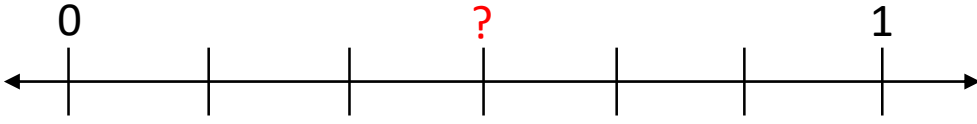


$$\frac{17}{20}$$



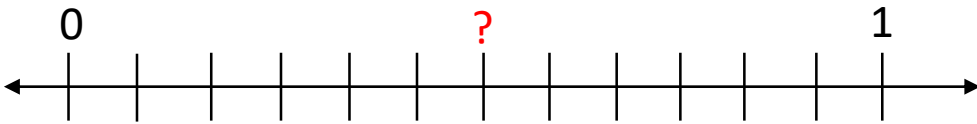
$$\frac{8}{20}$$

Sayı doğrusunda ? İşareti ile gösterilen yere karşılık gelen kesri ve okunuşunu yazalım.



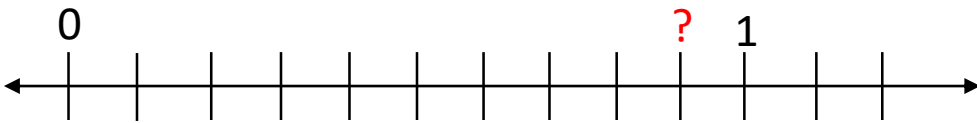
?:

okunuşu:



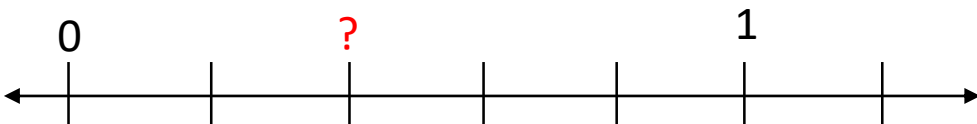
?:

okunuşu:



?:

okunuşu:



?:

okunuşu: