

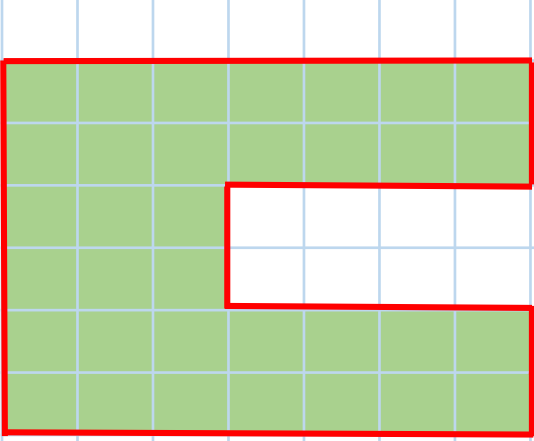
ADI:  
SOYADI:  
SINIFI:  
NO:

### 3.SINIF ETKİNLİKLERİ

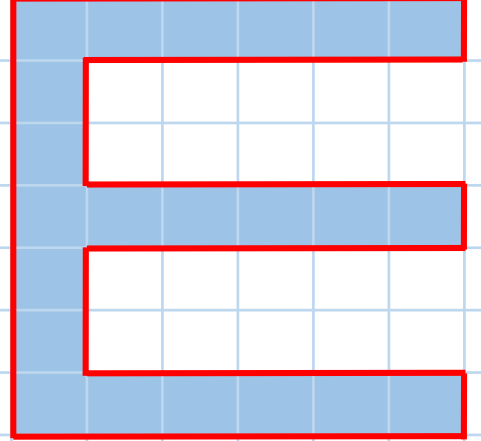
#### UZUNLUK ÖLÇME-5

[www.etkinlikkaravani.com](http://www.etkinlikkaravani.com)

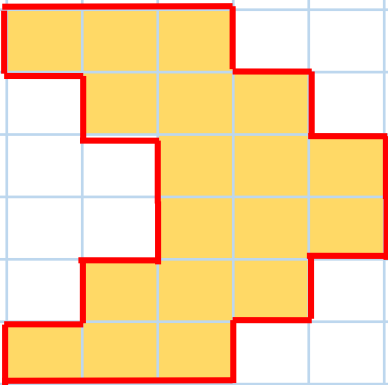
- Aşağıda verilen şekillerin çevre uzunluklarının kaç birim olduklarını hesaplayıp altına yazınız.



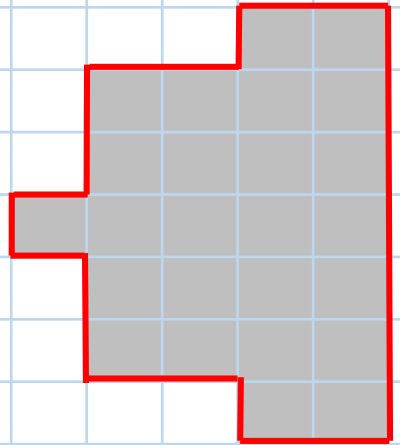
.....birim



.....birim



.....birim



.....birim