

ADI:
SOYADI:
SINIFI:
NO:

2.SINIF ETKİNLİKLERİ

TARTMA ETKİNLİKLERİ-2

www.etkinlikkaravani.com

Aşağıdaki nesnelerin ağırlıklarını belirleyip altlarına yazınız.



..... kg



..... kg




..... kg



..... kg




..... kg




..... kg



..... kg



..... kg



..... kg